

# Quiz FORM A - Domain and Range

Name \_\_\_\_\_ Period \_\_\_\_ Date \_\_\_\_\_

State the DOMAIN and RANGE of each relation.

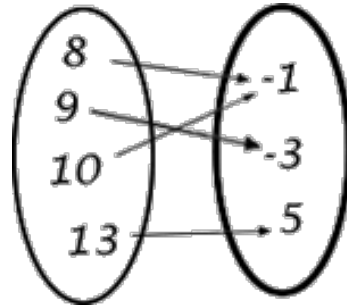
1.)

x	y
3	1
5	-6
7	8
9	-1

Domain: \_\_\_\_\_

Range: \_\_\_\_\_

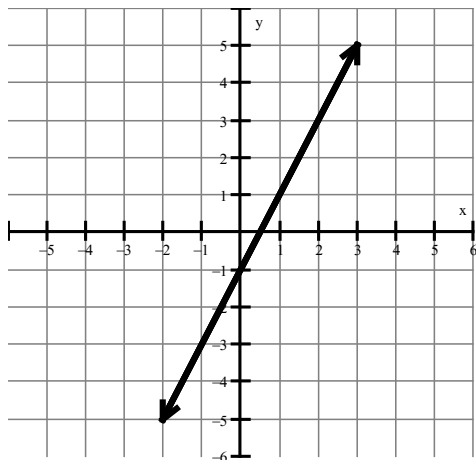
2.)



Domain: \_\_\_\_\_

Range: \_\_\_\_\_

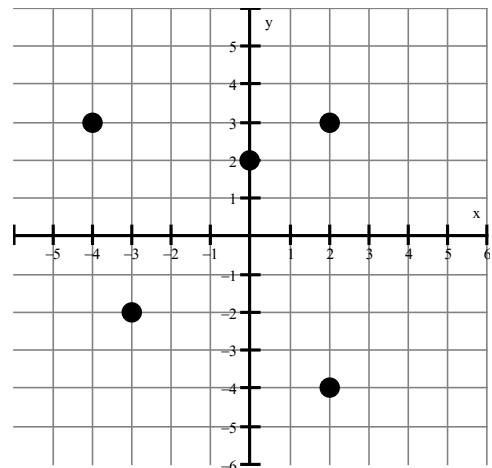
3.)



Domain: \_\_\_\_\_

Range: \_\_\_\_\_

4.)



Domain: \_\_\_\_\_

Range: \_\_\_\_\_

5.)  $\{(3,5), (4,6), (5,7), (3,9)\}$

Domain: \_\_\_\_\_ Range: \_\_\_\_\_

# Quiz FORM B - Domain and Range

Name \_\_\_\_\_ Period \_\_\_\_ Date \_\_\_\_\_

State the DOMAIN and RANGE of each relation.

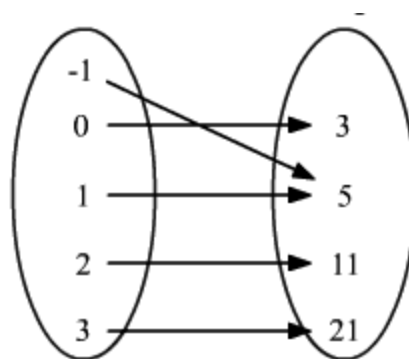
1.)

$x$	$y$
9	4
11	-2
13	6
15	-4

Domain: \_\_\_\_\_

Range: \_\_\_\_\_

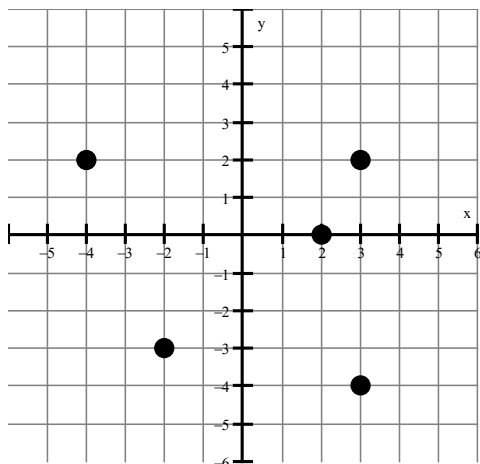
2.)



Domain: \_\_\_\_\_

Range: \_\_\_\_\_

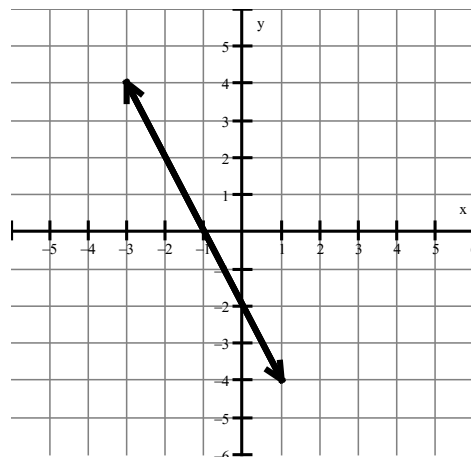
3.)



Domain: \_\_\_\_\_

Range: \_\_\_\_\_

4.)



Domain: \_\_\_\_\_

Range: \_\_\_\_\_

5.)  $\{(2,6),(7,11),(4,8),(7,15)\}$

Domain: \_\_\_\_\_ Range: \_\_\_\_\_